

**ANNIE BESANT SCHOOL**  
**F- Block Shastri Nagar, Meerut**

**Important things for parents to practice this summer**

Dear Parents,

There are certain things that we as parents must try to inculcate in our children. These things are very important in the development of your child. So let's spend this coming vacation in a constructive manner.

1. You must share good stories about your childhood and your family history with your child.
2. Your children must wash their own plates after every meal. They must learn the importance of doing their own work with such activities.
3. Take your children or send them to their Grandparents for at least one week. Take pictures with them.
4. They must accompany you to your workplace in order to understand how hard you work to support their daily needs.
5. All family members must have at least one meal together, if possible more than one meal a day. Teach them not to waste food and the importance of farmers.
6. If possible ask them to help you in daily household work without disturbing their study and playing schedule.
7. Raise a small kitchen garden in your backyard if you have space. Encourage them to plant some seeds. They must water these plants as necessary till they grow.
8. You as parents must learn 5 new words in English and list them in a notebook. Try to speak small sentences in English with them whenever it is possible.

**Regards**

**Annie Besant School**

**ANNIE BESANT SCHOOL**

F- Block Shastri Nagar, Meerut

Holiday Homework (2018-19) for students

Class –II

All work should be done neatly :-

Make a card on **Director's Day** which will be submitted in class on 2<sup>nd</sup> July 2018

**E.V.S.**

1.

The card template has a blue scalloped border. At the top, the title "It's All About:" is written in a large, bold, black font. Below the title is a large dashed oval. To the left of the oval, the text "I am" is written, followed by a blank circle. To the right of the oval, the text "years old!" is written. Below the oval, the text "I LIVE IN" is written in a large, bold, black font. To the left of this text is a large blank circle. To the right of this text is a dashed rectangle. Below the large circle, the text "This is Me:" is written. Below this text is a large blank circle. To the right of this text is a dashed rectangle. Below the dashed rectangle, the text "My Family" is written in a large, bold, black font. Below this text is a solid rectangle. To the right of this text is a dashed rectangle. Below the solid rectangle, the text "My Pet:" is written. Below this text is a large blank oval.

ANNIE BESANT SCHOOL

2.

GOOD CHARACTER WORD SEARCH

O	P	A	R	D	E	W	F	A	I	R	N	E	S	S
B	E	T	S	A	J	T	I	L	P	E	O	F	M	L
F	R	I	E	N	D	S	H	I	P	S	O	R	W	T
N	S	A	L	C	A	T	R	E	S	P	E	C	T	U
R	E	B	F	C	E	W	R	T	S	O	U	W	M	I
Q	V	M	D	C	I	T	I	Z	E	N	S	H	I	P
L	E	K	I	U	Y	L	V	E	A	S	L	A	E	T
T	R	U	S	T	W	O	R	T	H	I	N	E	S	S
E	A	W	C	R	Y	B	E	M	N	B	L	O	E	R
B	N	Y	I	V	G	R	L	K	E	I	H	A	D	J
U	C	J	P	A	B	Y	E	B	G	L	O	U	W	A
Y	E	O	L	B	H	I	C	A	R	I	N	G	P	F
M	G	N	I	L	G	M	E	A	H	T	R	T	L	O
W	H	F	N	H	O	N	E	S	T	Y	G	O	U	I
A	U	W	E	Q	J	U	C	O	U	R	A	G	E	T

RESPECT                      CARING                      RESPONSIBILITY  
FAIRNESS                      HONESTY                      PERSEVERANCE  
FRIENDSHIP                      TRUSTWORTHINESS  
CITIZENSHIP                      SELF-DISCIPLINE                      COURAGE

## ANNIE BESANT SCHOOL

3.

### Q1 Fill in the blanks

Smell	taste	see	hear	feel
-------	-------	-----	------	------

1. I can.....different shapes.
2. I can .....sweets.
3. I can.....hot milk.
4. I can.....sweet fragrance of flowers.
5. I can.....soft music.

### Q2.Name the following

1.Four eatables made from milk

.....	.....
.....	.....

2.Four vegetables you like to eat

.....	.....
.....	.....

3.Four fruits you like to eat

.....	.....
.....	.....

4.Four parts of the body

.....	.....
-------	-------

5.Four food items we get from animals

.....	.....
.....	.....






## ANNIE BESANT SCHOOL


5.


Fill in the missing letters in the crossword getting clues from the pictures. See which community helper's name appears in the red column. Also match the names in the crossword to their pictures:


Now from the above crossword write the names of the helpers who use these tools:











6. Make a family collage, collect photographs of your favourite people in the family. Stick them on a coloured A4 Size sheet.

## ANNIE BESANT SCHOOL

### 7. Manners of Eating

#### 1. Match the following phrases to complete them:

We should wash our hands	is near to you
Eat from what	our right hands
If we don't like it	before we eat
We should eat with	we should leave it

#### 2. Use the following words to complete the sentences:

healthy      leave      blessing      food      finish

We should always thank Allah for our \_\_\_\_\_ .

Cleanliness helps us to stay \_\_\_\_\_ .

Food is a \_\_\_\_\_ from Allah.

We should say Alhumdulillah when we \_\_\_\_\_ eating.

If we don't like a food we should \_\_\_\_\_ it.

ANNIE



ANNIE BESANT SCHOOL

Mathematics

Q1.

**ADDITION**

$$\begin{array}{r} 61 \\ + 34 \\ \hline \\ \hline \end{array}$$

$$\begin{array}{r} 28 \\ + 30 \\ \hline \\ \hline \end{array}$$

$$\begin{array}{r} 44 \\ + 44 \\ \hline \\ \hline \end{array}$$

$$\begin{array}{r} 35 \\ + 23 \\ \hline \\ \hline \end{array}$$

$$\begin{array}{r} 63 \\ + 44 \\ \hline \\ \hline \end{array}$$

$$\begin{array}{r} 41 \\ + 28 \\ \hline \\ \hline \end{array}$$

$$\begin{array}{r} 14 \\ + 25 \\ \hline \\ \hline \end{array}$$

$$\begin{array}{r} 52 \\ + 54 \\ \hline \\ \hline \end{array}$$

$$\begin{array}{r} 33 \\ + 36 \\ \hline \\ \hline \end{array}$$

$$\begin{array}{r} 32 \\ + 66 \\ \hline \\ \hline \end{array}$$

$$\begin{array}{r} 42 \\ + 32 \\ \hline \\ \hline \end{array}$$

$$\begin{array}{r} 55 \\ + 13 \\ \hline \\ \hline \end{array}$$

$$\begin{array}{r} 54 \\ + 24 \\ \hline \\ \hline \end{array}$$

$$\begin{array}{r} 12 \\ + 91 \\ \hline \\ \hline \end{array}$$

$$\begin{array}{r} 63 \\ + 40 \\ \hline \\ \hline \end{array}$$

$$\begin{array}{r} 52 \\ + 52 \\ \hline \\ \hline \end{array}$$

$$\begin{array}{r} 43 \\ + 30 \\ \hline \\ \hline \end{array}$$

$$\begin{array}{r} 36 \\ + 32 \\ \hline \\ \hline \end{array}$$

$$\begin{array}{r} 53 \\ + 50 \\ \hline \\ \hline \end{array}$$

$$\begin{array}{r} 40 \\ + 44 \\ \hline \\ \hline \end{array}$$

**ANNIE BESANT SCHOOL**

**Q2. Subtract the following**

$$\begin{array}{r} 64 \\ - 13 \\ \hline \end{array}$$

$$\begin{array}{r} 86 \\ - 75 \\ \hline \end{array}$$

$$\begin{array}{r} 85 \\ - 44 \\ \hline \end{array}$$

$$\begin{array}{r} 74 \\ - 31 \\ \hline \end{array}$$

$$\begin{array}{r} 55 \\ - 11 \\ \hline \end{array}$$

$$\begin{array}{r} 65 \\ - 62 \\ \hline \end{array}$$

$$\begin{array}{r} 95 \\ - 32 \\ \hline \end{array}$$

$$\begin{array}{r} 67 \\ - 13 \\ \hline \end{array}$$

$$\begin{array}{r} 98 \\ - 85 \\ \hline \end{array}$$

$$\begin{array}{r} 77 \\ - 65 \\ \hline \end{array}$$

$$\begin{array}{r} 56 \\ - 33 \\ \hline \end{array}$$

$$\begin{array}{r} 99 \\ - 54 \\ \hline \end{array}$$

$$\begin{array}{r} 68 \\ - 54 \\ \hline \end{array}$$

$$\begin{array}{r} 78 \\ - 25 \\ \hline \end{array}$$

$$\begin{array}{r} 96 \\ - 23 \\ \hline \end{array}$$

$$\begin{array}{r} 58 \\ - 22 \\ \hline \end{array}$$

$$\begin{array}{r} 88 \\ - 13 \\ \hline \end{array}$$

$$\begin{array}{r} 79 \\ - 46 \\ \hline \end{array}$$

$$\begin{array}{r} 66 \\ - 53 \\ \hline \end{array}$$

$$\begin{array}{r} 59 \\ - 57 \\ \hline \end{array}$$

$$\begin{array}{r} 84 \\ - 34 \\ \hline \end{array}$$

$$\begin{array}{r} 54 \\ - 53 \\ \hline \end{array}$$

$$\begin{array}{r} 69 \\ - 18 \\ \hline \end{array}$$

$$\begin{array}{r} 76 \\ - 23 \\ \hline \end{array}$$

Q3.

**Comparing Numbers**

Simplify and compare the values using the symbols ( $>$ ,  $<$  or  $=$ ).

1)	$12 + 5$	<input type="text"/>	$4 \times 5$	2)	$3 \times 6$	<input type="text"/>	$18 - 2$
3)	$15 \div 3$	<input type="text"/>	$9 - 4$	4)	$9 \times 2$	<input type="text"/>	$14 + 5$
5)	$6 \times 4$	<input type="text"/>	$18 + 5$	6)	$8 - 5$	<input type="text"/>	$12 \div 3$
7)	$3 + 9$	<input type="text"/>	$15 - 2$	8)	$18 \div 6$	<input type="text"/>	$2 + 1$
9)	$10 \div 2$	<input type="text"/>	$1 \times 3$	10)	$13 + 4$	<input type="text"/>	$5 \times 3$
11)	$19 - 4$	<input type="text"/>	$3 \times 5$	12)	$9 \div 3$	<input type="text"/>	$12 - 5$
13)	$4 \times 6$	<input type="text"/>	$18 + 9$	14)	$8 \times 2$	<input type="text"/>	$12 + 4$
15)	$14 - 5$	<input type="text"/>	$9 \div 3$	16)	$7 + 5$	<input type="text"/>	$19 - 6$
17)	$8 \div 2$	<input type="text"/>	$3 + 1$	18)	$18 \div 2$	<input type="text"/>	$4 \times 1$
19)	$11 + 3$	<input type="text"/>	$8 \times 5$	20)	$4 + 9$	<input type="text"/>	$1 \times 13$

ANNIE BESANT SCHOOL

Q4.

COMPARING NUMBERS TO 100

> is greater than	< is less than	= is equal to
$2 + 3 > 4$	$5 < 10 - 2$	$6 = 4 + 2$

- |                   |                     |
|-------------------|---------------------|
| 1) $3 + 5$ ___ 8  | 11) 5 ___ $6 - 3$   |
| 2) $9 - 1$ ___ 6  | 12) 2 ___ $4 - 2$   |
| 3) 26 ___ 62      | 13) 7 ___ $4 + 4$   |
| 4) $5 - 2$ ___ 1  | 14) 62 ___ 59       |
| 5) $3 + 3$ ___ 10 | 15) 56 ___ 58       |
| 6) $8 - 2$ ___ 5  | 16) 3 ___ $5 - 4$   |
| 7) 27 ___ 22      | 17) 6 ___ $8 - 2$   |
| 8) 36 ___ 29      | 18) 5 ___ $9 - 1$   |
| 9) $3 + 4$ ___ 7  | 19) 30 ___ $20 + 3$ |
| 10) $7 - 1$ ___ 8 | 20) 11 ___ $5 + 6$  |

## ANNIE BESANT SCHOOL

Q5.

### CONVERT TO STANDARD FORM 4 DIGITS

Remember to start counting from the largest value digit first.



- |                                  |                                   |
|----------------------------------|-----------------------------------|
| 1) $1000 + 300 + 20 + 6 =$ _____ | 21) $6000 + 200 + 4 =$ _____      |
| 2) $2000 + 100 + 60 + 4 =$ _____ | 22) $8000 + 300 + 20 + 5 =$ _____ |
| 3) $4000 + 500 + 20 + 3 =$ _____ | 23) $9000 + 20 + 8 =$ _____       |
| 4) $7000 + 100 + 30 + 9 =$ _____ | 24) $4000 + 30 + 9 =$ _____       |
| 5) $5000 + 600 + 80 + 3 =$ _____ | 25) $6000 + 200 + 45 =$ _____     |
| 6) $9000 + 100 + 50 + 2 =$ _____ | 26) $8000 + 400 + 56 =$ _____     |
| 7) $3000 + 200 + 60 + 7 =$ _____ | 27) $1000 + 600 + 23 =$ _____     |
| 8) $8000 + 400 + 30 + 1 =$ _____ | 28) $5000 + 200 + 76 =$ _____     |
| 9) $7000 + 200 + 60 =$ _____     | 29) $6000 + 321 =$ _____          |
| 10) $4000 + 100 + 90 =$ _____    | 30) $2000 + 178 =$ _____          |
| 11) $8000 + 500 + 20 =$ _____    | 31) $7000 + 684 =$ _____          |
| 12) $6000 + 700 + 4 =$ _____     | 32) $9000 + 109 =$ _____          |
| 13) $5000 + 300 + 2 =$ _____     | 33) $6000 + 140 + 2 =$ _____      |
| 14) $9000 + 400 + 8 =$ _____     | 34) $8000 + 420 + 6 =$ _____      |
| 15) $2000 + 80 + 4 =$ _____      | 35) $3000 + 690 + 1 =$ _____      |
| 16) $1000 + 60 + 9 =$ _____      | 36) $7500 + 56 =$ _____           |
| 17) $4000 + 50 + 3 =$ _____      | 37) $5100 + 35 =$ _____           |
| 18) $3000 + 200 + 6 =$ _____     | 38) $6700 + 23 =$ _____           |
| 19) $7000 + 500 + 30 =$ _____    | 39) $9600 + 84 =$ _____           |
| 20) $1000 + 70 + 3 =$ _____      | 40) $2700 + 3 =$ _____            |



ANNIE BESANT SCHOOL

Q6.

PLACE VALUE 3 DIGITS: EXPAND IT 2

Write these numbers in expanded form.

---

1)	615	=	600 + 10 + 5
----	-----	---	--------------

---

2)	829	=	
----	-----	---	--

---

3)	337	=	
----	-----	---	--

---

4)	706	=	
----	-----	---	--

---

5)	912	=	
----	-----	---	--

---

6)	847	=	
----	-----	---	--

---

7)	76	=	
----	----	---	--

---

8)	428	=	
----	-----	---	--

---

9)	195	=	
----	-----	---	--

---

10)	55	=	
-----	----	---	--

---

11)	306	=	
-----	-----	---	--

---

12)	287	=	
-----	-----	---	--

---

13)	940	=	
-----	-----	---	--

---

14)	452	=	
-----	-----	---	--

---

15)	284	=	
-----	-----	---	--

---

16)	342	=	
-----	-----	---	--

---

17)	78	=	
-----	----	---	--

---

18)	983	=	
-----	-----	---	--

---

19)	609	=	
-----	-----	---	--

---

20)	376	=	
-----	-----	---	--

---

**ANNIE BESANT SCHOOL**

**Q7.**

Place Value

Directions: Write the value of the underlined digit.

<u>5</u> 4	<u>50</u>	4 <u>7</u>	<u>7</u>	<u>8</u> 3	<u>80</u>
<u>3</u> 5	_____	<u>8</u> 9	_____	3 <u>3</u>	_____
<u>7</u> 4	_____	<u>2</u> 5	_____	4 <u>4</u>	_____
<u>5</u> 1	_____	<u>3</u> 7	_____	<u>6</u> 2	_____
<u>5</u> 5	_____	4 <u>2</u>	_____	<u>1</u> 8	_____
<u>3</u> 9	_____	<u>1</u> 6	_____	3 <u>8</u>	_____
<u>4</u> 0	_____	8 <u>9</u>	_____	<u>9</u> 9	_____
<u>7</u> 0	_____	<u>2</u> 8	_____	<u>4</u> 8	_____

ANNIE BESANT SCHOOL

Q8.

**Write the number names**

101: One Hundred and One

152: \_\_\_\_\_

251: \_\_\_\_\_

212: \_\_\_\_\_

311: \_\_\_\_\_

374: \_\_\_\_\_

452: \_\_\_\_\_

483: \_\_\_\_\_

574: \_\_\_\_\_

582: \_\_\_\_\_

622: \_\_\_\_\_

693: \_\_\_\_\_

791: \_\_\_\_\_

727: \_\_\_\_\_

881: \_\_\_\_\_



**ANNIE BESANT SCHOOL**

**Q9. Read and Answer each questions**

1. 14 birds were sitting in a tree. 21 more birds flew up to the tree. How many birds were there altogether in the tree?
2. 29 birds were sitting in a tree. Some more fly up to the tree. Then there were 42 birds in the tree. How many more flew up to the tree?
3. Beth has 74 crayons. She gives 25 of them away to Jen. How many crayons does Beth have left?
4. Cindy's mom baked 41 cookies. Paul's dad baked 38 cookies. They both brought them to school for a party. How many cookies did they have altogether?
5. 18 children were riding on the bus. At the bus stop, some more children got on the bus. Then there were 25 children altogether on the bus. How many children got on the bus at the bus stop?

## ANNIE BESANT SCHOOL

### English

1. Do 30 page writing.
2. Make a chart on poem with pictures. (According to your roll numbers)

Roll No.	1 – 2	Upside Down
	3 – 4	Rain Drops
	5 – 6	The Balloon Man
	7 – 8	Ant and the Dove
3. Write daily 3 news from newspaper of your interest.
4. Write 20 difficult words from newspaper and find their meaning from dictionary.
5. Learn any 3 poem.

***Note : - Make a separate holiday homework copy for the above work.***

## ANNIE BESANT SCHOOL

### 6. One and more than one

#### Changing Between Singular and Plural Nouns

Change each singular noun to its plural form and change each plural noun to singular form.

- |                     |                    |
|---------------------|--------------------|
| (1) bracket _____   | (20) flowers _____ |
| (2) signals _____   | (21) monster _____ |
| (3) monkey _____    | (22) bus _____     |
| (4) fry _____       | (23) prairie _____ |
| (5) screens _____   | (24) seams _____   |
| (6) copies _____    | (25) scene _____   |
| (7) chore _____     | (26) rivers _____  |
| (8) taxes _____     | (27) curries _____ |
| (9) ray _____       | (28) elk _____     |
| (10) digit _____    | (29) locks _____   |
| (11) plays _____    | (30) lungs _____   |
| (12) blue _____     | (31) spring _____  |
| (13) inquiry _____  | (32) guide _____   |
| (14) stream _____   | (33) barges _____  |
| (15) tomb _____     | (34) party _____   |
| (16) bells _____    | (35) grips _____   |
| (17) bakeries _____ | (36) dreams _____  |
| (18) trial _____    | (37) journey _____ |
| (19) uniforms _____ | (38) belief _____  |

## ANNIE BESANT SCHOOL

### 7. Common Name and Special Name

- ✓ A common noun names a person place or thing.  
Common nouns begin with lowercase letters.

*game*

*school*

*girl*

- ✓ A proper noun names a particular or special person, place or thing.  
Proper nouns begin with a Capital letters.

Mr. Lee

Carolyn

Fremont Elementary

Target

Charlotte's Web

Write each noun in a star on the correct side. Remember to begin each proper noun with a Capital letter.

Common  
Nouns

Proper  
Nouns

1. atlantic ocean

2. library

3. september

4. tuesday

5. student

6. santa claus

7. Car

8. desk

ANNIE BESANT SCHOOL

8.

**Antonyms**

Antonyms are words that are opposites.  
example: **hot** and **cold** are antonyms

 Directions: Write the correct antonym next to each word.

dry	pretty	bad	icy
messy	hard	fast	easy
right	small	noisy	friend
asleep	night	angry	rich

big		happy	
good		soft	
wet		poor	
clean		ugly	
enemy		quiet	
slow		wrong	
difficult		hot	
day		awake	

**ANNIE BESANT SCHOOL**

**9. Put these naming words in the right column**

teacher      pencil      eraser      school  
library      doctor      desk      park      girl

Person	Place	Thing

**Hindi**

1. 30 पेज की सुलेख लिखे ।
2. कविता के ऊपर chart बनाए ।

Roll No. 1 - 2      प्रार्थना

" 3 - 4      सीखो

" 5 - 6      बादल

" 7      चिड़िया

3. पाठ - 4, 5, 6 के शब्द - अर्थ लिखो ।
4. महीनो और दिनों के नाम लिखो 3 बार और याद करो ।
5. Learn any two poem.

***Note : - Make a separate holiday homework copy for the above work.***

## **ANNIE BESANT SCHOOL**

**G.K.**

1. What is the name of our Country's President?

\_\_\_\_\_.

2. What is the name of our country's prime minister?

\_\_\_\_\_.

3. What is the capital of UP?

\_\_\_\_\_.

4. Which is the newest state of India?

\_\_\_\_\_.

5. How many colours are there in rainbow?

\_\_\_\_\_.

6. Who wrote our "National Anthem"?

\_\_\_\_\_.

7. What is the capital of Andhra Pradesh?

\_\_\_\_\_.

8. What is the capital of Telengana?

\_\_\_\_\_.

9. In which year our country got independent?

\_\_\_\_\_.

10. Who is called "the father of our nation"?

\_\_\_\_\_.

# ANNIE BESANT SCHOOL

11. Who became India;s cricket captain when he was 23 years old?

---

12. What is the model of the Earth we can keep at home called?

---

13. Why is Children's day celebrated on 14 November?

---

14. Which is the fastest land animal?

---

15. Which is the biggest reptile on Earth?

---

## English Conversation

1. Describe a visit to your nearby park in the evening.

ANNE BL



**ANNIE BESANT SCHOOL**

2. What games do you play?

---

---

---

3. Who are your friends with whom you play in the evening?

---

---

---

4. Describe in 10 lines outing with your family to watch a movie?

---

---

---

---

---

---

---

---

---

---

—

## ANNIE BESANT SCHOOL

### Computer

1. Draw and colour different areas where you can use computer on a chart paper.
2. Label the Keyboard.



3. Match the column

#### Column A

1.



2.



3.



#### Column B

a) Pen driv

b) Floppy disk

c) CD-ROM

## ANNIE BESANT SCHOOL

4.

Find the words in the grid which are given in the word box.

COMPUTER	DESKTOP PC	TOWER PC	KEYBOARD
MOUSE	MONITOR	DVD	SCREEN
PRINTER	SCANNER	HEADPHONES	CABLES
LAPTOP	WORKSTATION	CD DRIVE	COMPACT DISC

V	D	U	K	C	A	B	L	E	S	T	Z	S	C	R	E	E	N	J	X
P	H	C	S	V	K	K	S	Q	O	V	Z	J	P	X	P	P	T	S	U
K	T	E	I	P	A	V	R	I	V	J	N	A	V	Y	C	F	C	F	O
U	H	H	D	B	S	Z	E	C	M	O	N	I	T	O	R	M	A	R	K
N	V	X	Y	D	T	J	K	A	R	A	F	E	L	O	Y	Z	W	O	Q
E	O	Q	P	V	S	C	A	N	N	E	R	U	I	N	W	Q	Y	Y	Z
V	U	L	P	D	F	R	E	N	N	O	I	T	A	T	S	K	R	O	W
I	V	M	O	M	K	I	P	C	O	M	P	U	T	E	R	U	R	C	U
R	V	A	L	L	Q	D	S	F	D	W	U	A	R	M	F	B	M	M	Y
D	Z	G	F	M	G	W	Z	E	R	T	U	U	P	L	C	E	N	P	M
D	E	X	C	X	Y	U	H	S	T	S	Y	M	O	S	P	O	S	W	R
C	P	F	I	V	S	I	I	X	L	T	G	C	T	Z	P	B	A	V	E
E	P	G	C	D	J	C	S	I	D	T	C	A	P	M	O	C	M	P	T
L	O	G	O	R	E	B	T	E	N	J	A	V	A	N	T	D	P	A	N
G	L	K	N	A	N	X	P	X	F	F	J	K	L	G	K	K	K	V	I
Z	K	Q	C	O	M	O	U	S	E	A	P	P	P	S	S	D	L	Z	R
K	N	W	J	B	R	K	B	H	O	Z	F	A	A	S	E	J	W	D	P
W	Q	L	W	Y	C	U	Y	V	G	D	F	T	A	Q	D	W	V	K	Y
C	E	J	S	E	N	O	H	P	D	A	E	H	C	P	R	E	W	O	T
G	B	Y	Q	K	A	S	L	M	B	I	Z	B	V	K	P	L	G	R	K